



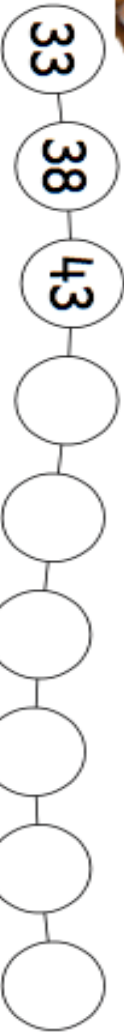
Completa la tabla con los números hasta el 70.

NÚMEROS HASTA EL 70

1																			
---	--	--	--	--	--	--	--	--	--	--	--	--	--	--	--	--	--	--	--



Completa las series



$14 + 11 = \underline{\quad}$

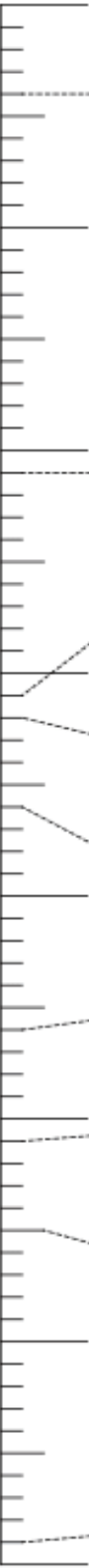
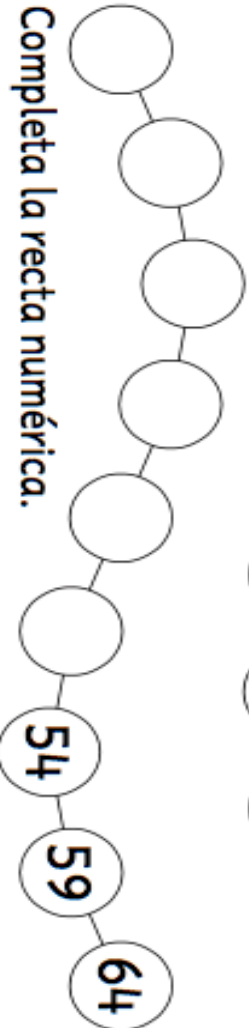
$22 + 12 = \underline{\quad}$

$6 + 28 = \underline{\quad}$

$1 + 8 = \underline{\quad}$



Completa la recta numérica.




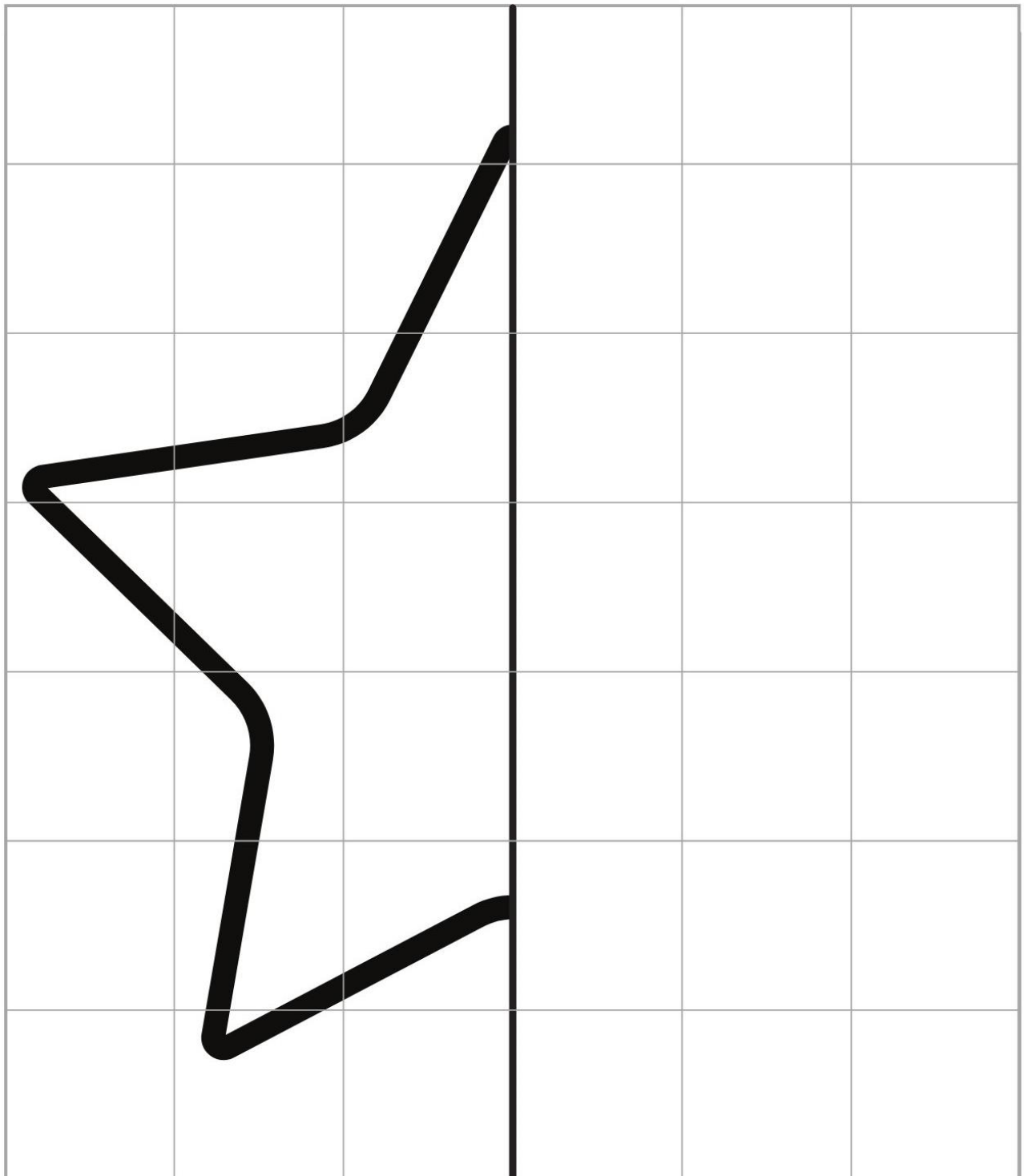
Calcula.

--	--	--	--	--	--

NOMBRE :

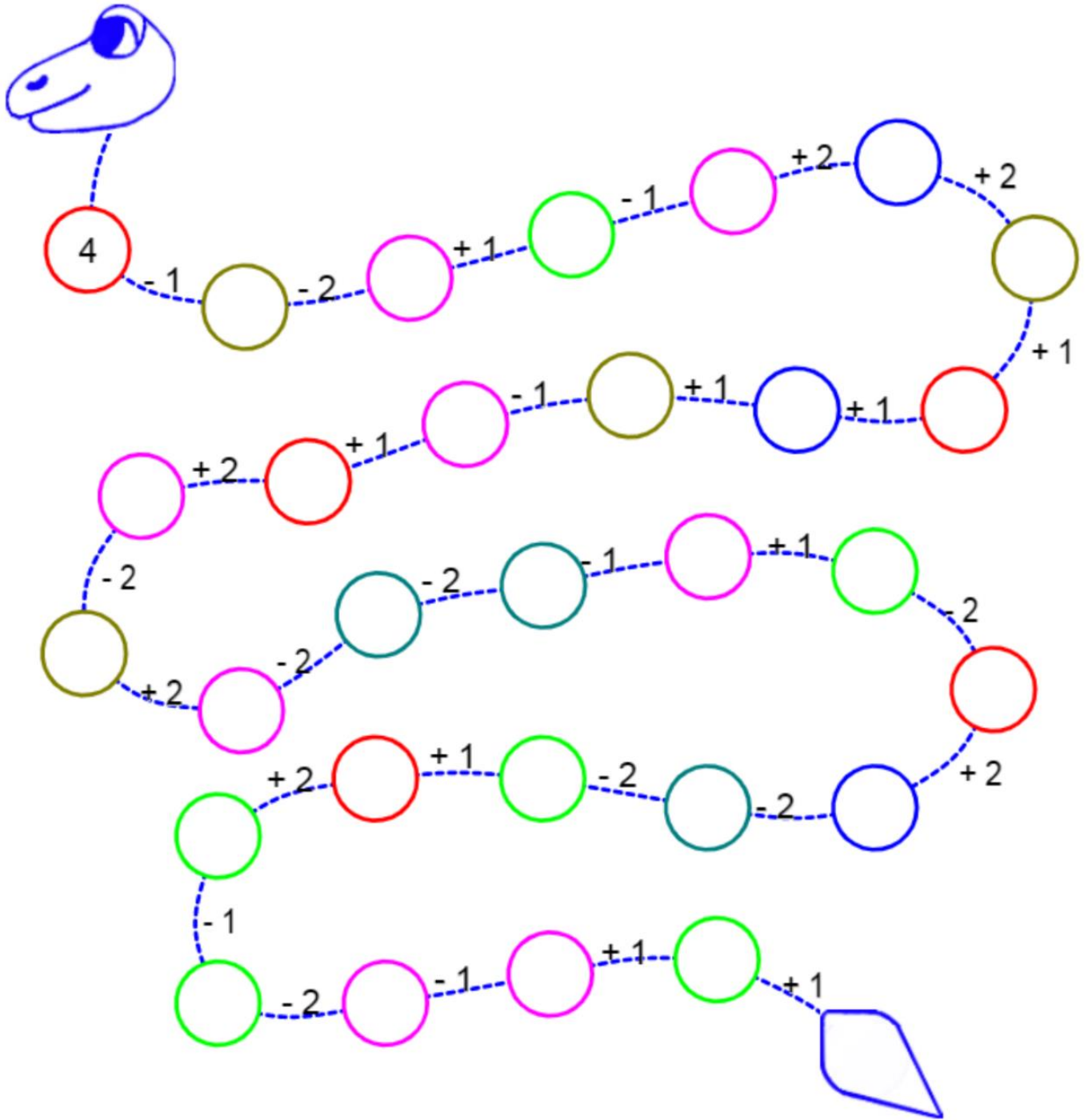
CURSO : 6^ºA







COMPLETA LA SIMETRÍA



NOMBRE :











CURSO : 6^ºA




					
---	---	---	---	---	---

NOMBRE :

CURSO : 6^ºA

1  <table border="1" data-bbox="151 481 750 537"><tr><td> </td><td>+</td><td> </td><td>=</td><td> </td></tr></table>		+		=		2  <table border="1" data-bbox="869 481 1468 537"><tr><td> </td><td>+</td><td> </td><td>=</td><td> </td></tr></table>		+		=	
	+		=								
	+		=								
3  <table border="1" data-bbox="151 772 750 828"><tr><td> </td><td>+</td><td> </td><td>=</td><td> </td></tr></table>		+		=		4  <table border="1" data-bbox="869 772 1468 828"><tr><td> </td><td>+</td><td> </td><td>=</td><td> </td></tr></table>		+		=	
	+		=								
	+		=								
5  <table border="1" data-bbox="151 1131 750 1187"><tr><td> </td><td>+</td><td> </td><td>=</td><td> </td></tr></table>		+		=		6  <table border="1" data-bbox="869 1131 1468 1187"><tr><td> </td><td>+</td><td> </td><td>=</td><td> </td></tr></table>		+		=	
	+		=								
	+		=								
7  <table border="1" data-bbox="151 1433 750 1489"><tr><td> </td><td>+</td><td> </td><td>=</td><td> </td></tr></table>		+		=		8  <table border="1" data-bbox="869 1433 1468 1489"><tr><td> </td><td>+</td><td> </td><td>=</td><td> </td></tr></table>		+		=	
	+		=								
	+		=								
9  <table border="1" data-bbox="151 1792 750 1848"><tr><td> </td><td>+</td><td> </td><td>=</td><td> </td></tr></table>		+		=		10  <table border="1" data-bbox="869 1792 1468 1848"><tr><td> </td><td>+</td><td> </td><td>=</td><td> </td></tr></table>		+		=	
	+		=								
	+		=								



NOMBRE :

CURSO : 6^ºA

70									
	59						53		
		48							
								2	

$$\begin{array}{r} 60 \\ -10 \\ \hline \end{array}$$

$$\begin{array}{r} 71 \\ -48 \\ \hline \end{array}$$

$$\begin{array}{r} 82 \\ -25 \\ \hline \end{array}$$


$$\begin{array}{r} 32 \\ -10 \\ \hline \end{array}$$

$$\begin{array}{r} 74 \\ -6 \\ \hline \end{array}$$

$$\begin{array}{r} 60 \\ -15 \\ \hline \end{array}$$

$$\begin{array}{r} 48 \\ -18 \\ \hline \end{array}$$

$$\begin{array}{r} 31 \\ -3 \\ \hline \end{array}$$



NOMBRE :

CURSO : 6^ºA

Ordena las letras para escribir los números

1 U O N
□ □ □

I S S 6
E S
□ □ □ □

2 S O D
□ □ □

E S 7
T I E
□ □ □ □ □

3 E R
S T
□ □ □ □







O H 8
O C
□ □ □ □

4 U R T A
O C T
□ □ □ □ □ □

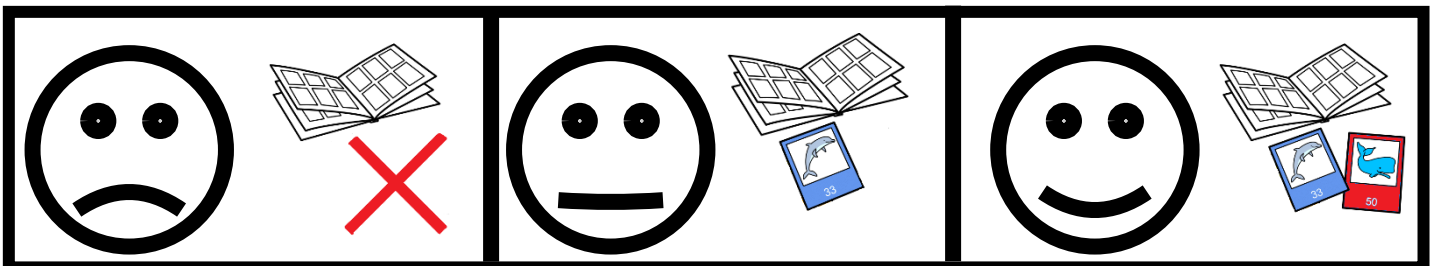
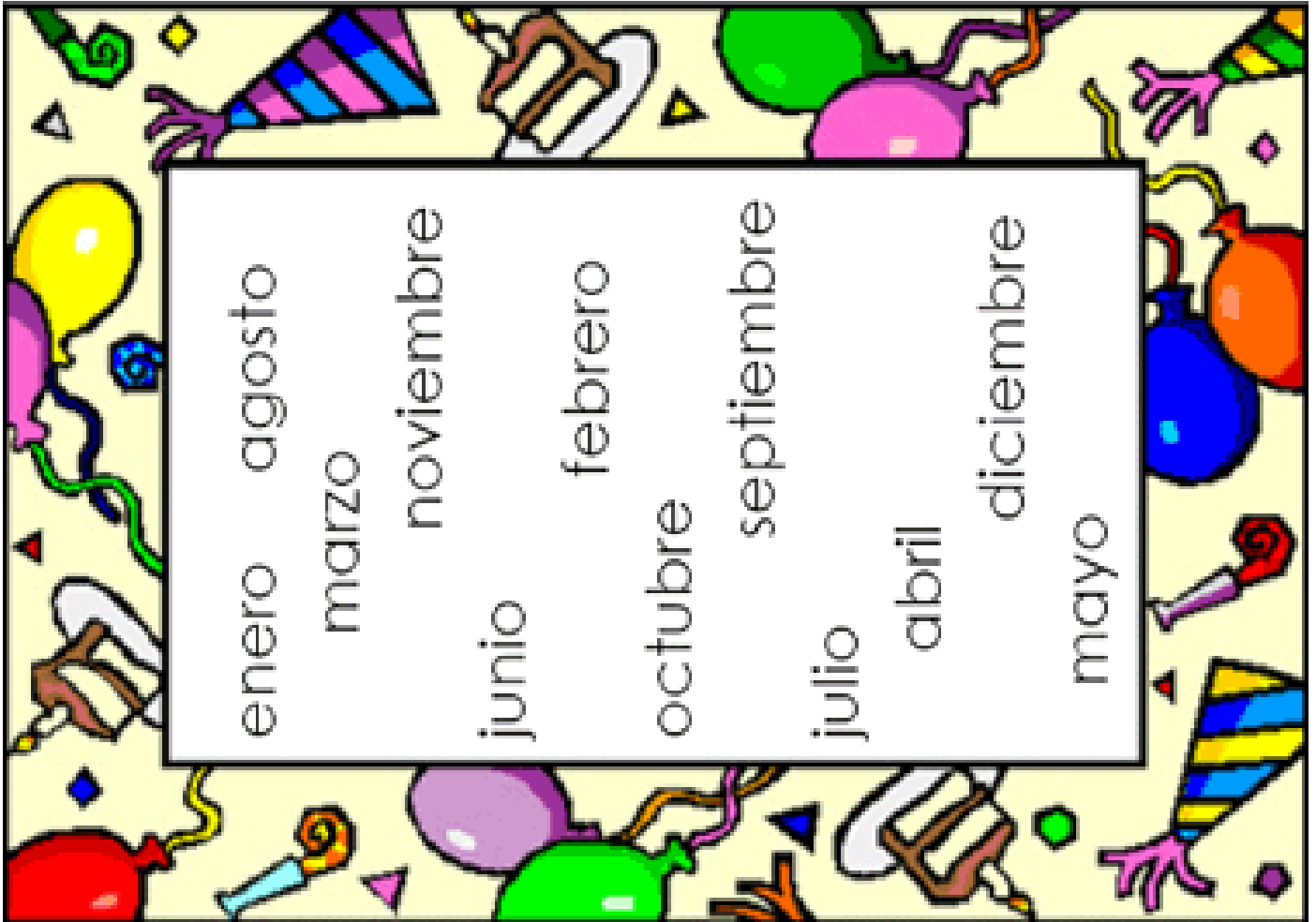
E E V U 9
N V
□ □ □ □ □

5 C C N
O I
□ □ □ □ □

E N D 10
I D
□ □ □ □

 	 	 
--	--	--

- 1. e _ _ _
- 2. _ e _ _ _
- 3. _ _ z _ _
- 4. _ _ r _ _
- 5. m _ _ _
- 6. j _ _ _
- 7. _ _ l _ _
- 8. _ _ _ o _ _
- 9. s _ _ _
- 10. _ _ t _ _
- 11. _ _ o _ _
- 12. _ _ c _ _



1.- Une cada suma con su resultado.


$9 + 1$	11	12	$9 + 10$
$9 + 6$	10	13	$9 + 3$
$9 + 2$	18	17	$9 + 4$
$9 + 5$	15	16	$9 + 8$
$9 + 9$	14	19	$9 + 7$

2.- Colorea de azul..... donde haya 5 decenas,
 de amarillo..... donde haya 6 decenas
 y de verde..... donde haya 7 decenas

$30 + 20$	$10 + 50$	$40 + 30$
$40 + 20$	$10 + 40$	$30 + 30$
$10 + 60$	$50 + 20$	$50 + 0$

3.- Escribe los números impares desde el 1 hasta el 55.

1	3	5				
	17					
		33				
			49			55



1 Ayúdame a terminar de contar:

50 51 52 53 54 58

60 61 62 65 69

70 72 73 77

80 81 82

91



2 Relaciono:

Diecinueve	12	cincuenta y cinco	78
Doce	19	sesenta y siete	55
Veintitres	34	ochenta y dos	67
Ochenta y seis	23	ochenta y nueve	96
Cuarenta y uno	86	setenta y ocho	82
Treinta y cuatro	41	noventa y seis	89


3 Hallo la suma:

$50 + 7 = \square$ $60 + 6 = \square$ $70 + 5 = \square$ $80 + 4 = \square$
 $60 + 4 = \square$ $70 + 4 = \square$ $90 + 3 = \square$ $90 + 8 = \square$


--	--	--

NOMBRE :


CURSO : 6^ºA








- Un Sol arriba de la niña
- Una pelota a la izquierda
- Un perro a la derecha
- Un gato abajo









SUMA CON LLEVADAS

<div style="display: flex; justify-content: space-around;"> <div style="text-align: left;"> <p>D U</p> <p>○</p> <p>3 7</p> <p>+ 5 8</p> <hr style="width: 100%;"/> <p>○ ○</p> </div> <div style="text-align: left;"> <p>D U</p> <p>○</p> <p>6 5</p> <p>+ 2 5</p> <hr style="width: 100%;"/> <p>○ ○</p> </div> <div style="text-align: left;"> <p>D U</p> <p>○</p> <p>3 4</p> <p>+ 2 9</p> <hr style="width: 100%;"/> <p>○ ○</p> </div> </div>
<div style="display: flex; justify-content: space-around;"> <div style="text-align: left;"> <p>D U</p> <p>○</p> <p>4 8</p> <p>+ 3 3</p> <hr style="width: 100%;"/> <p>○ ○</p> </div> <div style="text-align: left;"> <p>D U</p> <p>○</p> <p>4 5</p> <p>+ 2 9</p> <hr style="width: 100%;"/> <p>○ ○</p> </div> <div style="text-align: center;">  </div> </div>

○ 67 + 7 <hr style="width: 100%;"/>	○ 27 + 53 <hr style="width: 100%;"/>	○ 42 + 36 <hr style="width: 100%;"/>	○ 52 + 19 <hr style="width: 100%;"/>	○ 36 + 28 <hr style="width: 100%;"/>
				

COMPLETA LA RECTA NÚMÉRICA

			73			77		
								80
89						84		

 	 	 
---	---	---

➤ Realiza estas sumas con llevada

	1	
	D	U
	4	5
+	1	6

	○	
	D	U
	3	4
+	2	7

	○	
	D	U
	1	8
+	5	2

➤ Realiza estas restas

	D	U
	6	5
-	3	0

	D	U
	7	8
-		4

	D	U
	4	7
-	4	5

➤ Escribe el número anterior y posterior

	50	
--	----	--








	79	
--	----	--

	59	
--	----	--

	70	
--	----	--

	60	
--	----	--

	65	
--	----	--

NOMBRE :

CURSO: 6^ºA

Resuelve las siguientes operaciones y pinta el dibujo del color que se indica en el resultado de cada una.

$$\begin{array}{r} \text{ROJO} \\ 25 \\ + 36 \\ \hline \end{array}$$

$$\begin{array}{r} \text{VERDE} \\ 32 \\ + 49 \\ \hline \end{array}$$

$$\begin{array}{r} \text{MARRÓN} \\ 47 \\ + 18 \\ \hline \end{array}$$

$$\begin{array}{r} \text{CELESTE} \\ 18 \\ + 26 \\ \hline \end{array}$$

$$\begin{array}{r} \text{ROSA} \\ 29 \\ + 13 \\ \hline \end{array}$$

$$\begin{array}{r} \text{NEGRO} \\ 38 \\ + 24 \\ \hline \end{array}$$







$$\begin{array}{r} \text{BLANCO} \\ 27 \\ + 27 \\ \hline \end{array}$$

$$\begin{array}{r} \text{AMARILLO} \\ 38 \\ + 38 \\ \hline \end{array}$$

$$\begin{array}{r} \text{AZUL MARINO} \\ 14 \\ + 9 \\ \hline \end{array}$$

$$\begin{array}{r} \text{NARANJA} \\ 25 \\ + 25 \\ \hline \end{array}$$




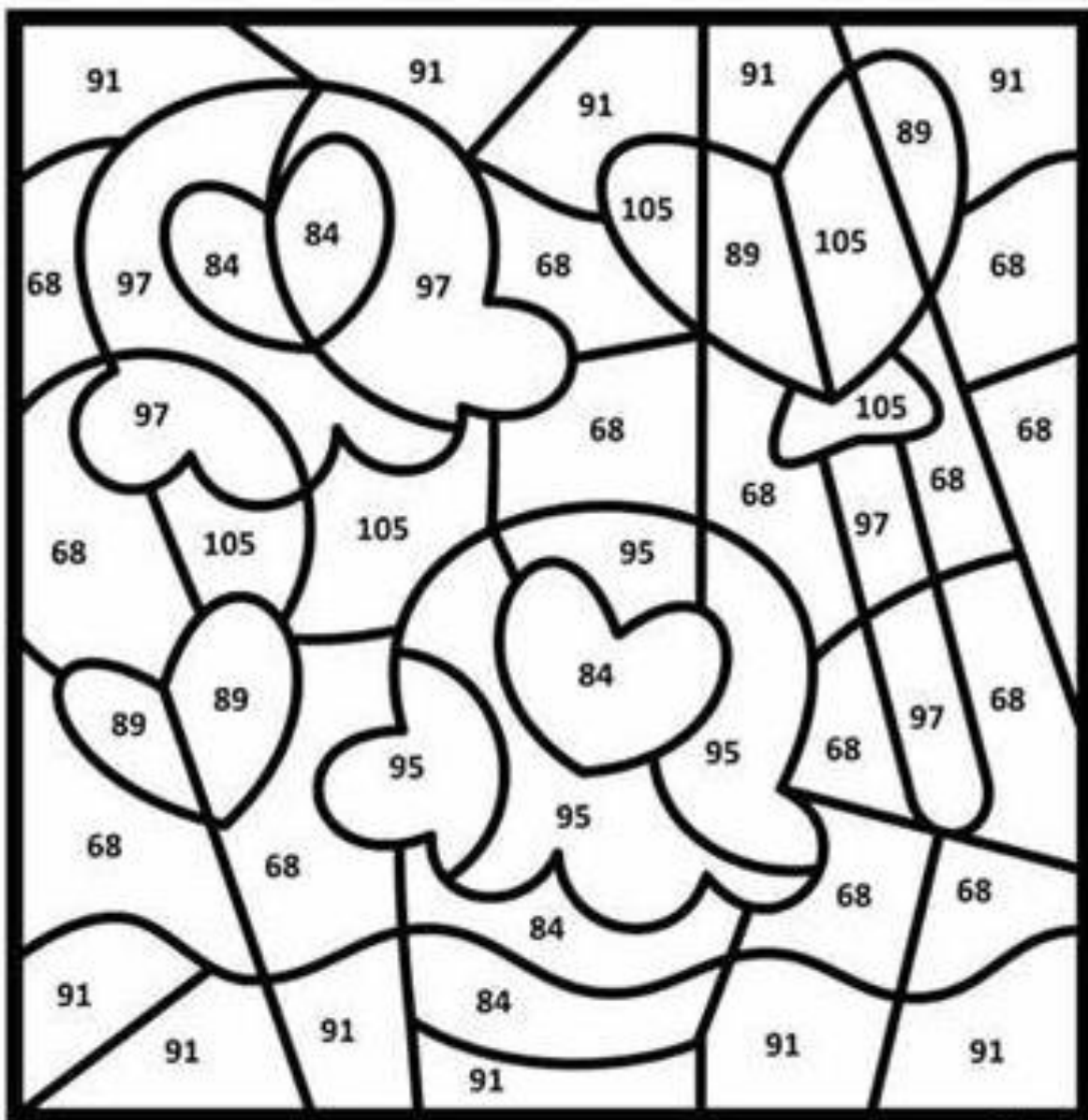
					
---	---	---	---	---	---

NOMBRE :

CURSO : 6^ºA

*Resuelve las sumas y colorea el dibujo de acuerdo con la clave de las respuestas.

Rojo	Azul Cielo	Verde	Amarillo	Anaranjado	Rosa	Morado
$36 + 48 =$	$53 + 38 =$	$41 + 27 =$	$72 + 33 =$	$64 + 25 =$	$70 + 27 =$	$74 + 21 =$
$52 + 32 =$	$62 + 29 =$	$36 + 32 =$	$65 + 40 =$	$57 + 32 =$	$62 + 35 =$	$54 + 41 =$





NOMBRE :

CURSO : 6^ºA

Resuelve las restas y colorea el dibujo de acuerdo con la clave de las respuestas.

Morado	Rosa	Verde Claro	Amarillo	Azul	Café	Bianco
$89 - 37 =$	$78 - 36 =$	$89 - 45 =$	$59 - 38 =$	$72 - 22 =$	$79 - 54 =$	$48 - 31 =$
$96 - 42 =$	$95 - 32 =$	$65 - 25 =$	$68 - 52 =$	$65 - 33 =$	$37 - 26 =$	$86 - 73 =$


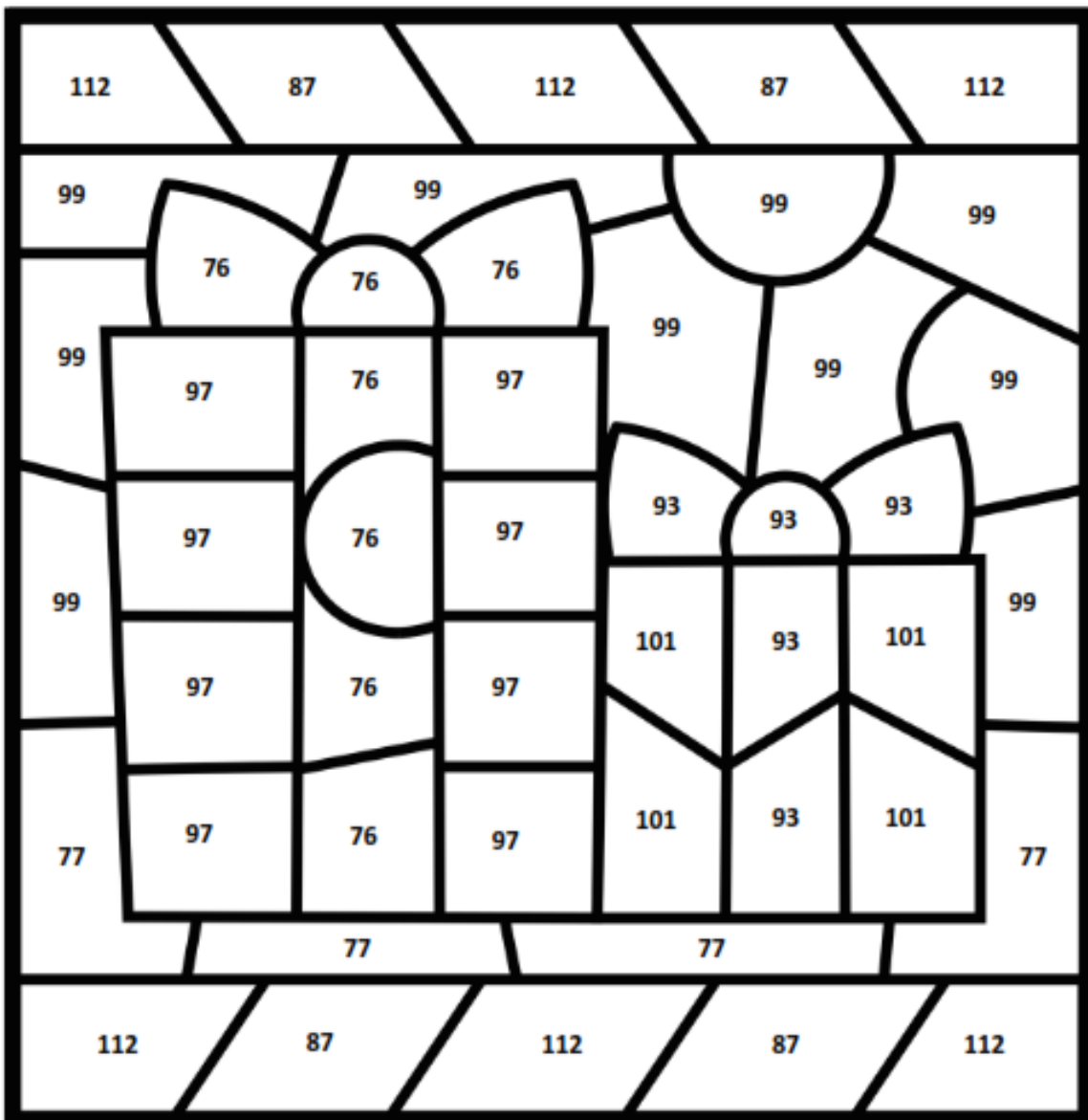


NOMBRE :

CURSO : 6^ºA


Resuelve las sumas y colorea el dibujo de acuerdo con la clave de respuestas.

Rojo	Azul Cielo	Verde	Amarillo	Café	Morado	Anaranjado	Azul
$68 + 44 =$	$54 + 33 =$	$59 + 42 =$	$62 + 37 =$	$45 + 32 =$	$64 + 33 =$	$47 + 29 =$	$66 + 27 =$
$59 + 53 =$	$49 + 38 =$	$73 + 28 =$	$54 + 45 =$	$52 + 25 =$	$59 + 38 =$	$39 + 37 =$	$54 + 39 =$




NOMBRE :

CURSO : 6^ºA



NOMBRE :

CURSO : 6^ºA



NOMBRE :

CURSO : 6^ºA

